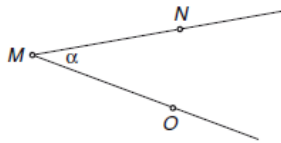
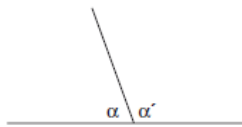


# ŠPELA SE PREIZKUSI

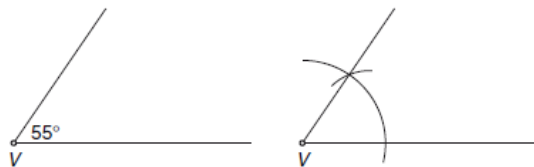
1  $\sphericalangle M = \sphericalangle OMN = \alpha$



2  $\alpha' = 110^\circ$



3



4 a)  $1455'$       b)  $24^\circ 18'$

5 a)  $84^\circ$       b)  $13^\circ$       c)  $123^\circ 17'$       č)  $75^\circ 47'$

6 a)      b)



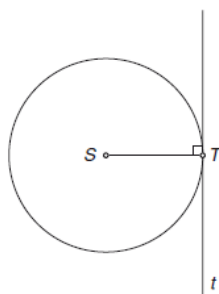
7 Kot  $\alpha$  je ostri kot, sokot meri  $139^\circ$

8 Sovršni kot meri  $120^\circ$

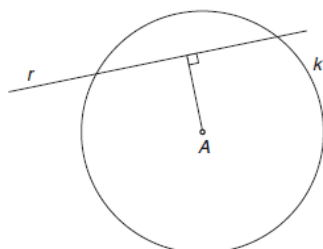
9 a) P    b) N    c) P    č) N    d) P

10  $S$  središče;  $UV$  premer;  $SM$  polmer;  
 $TV$  tetiva;  $m$  mimobežnica

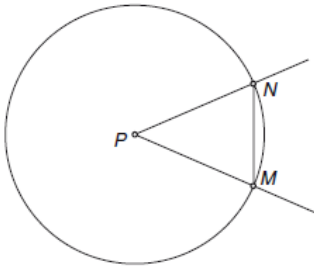
11



12 Točka  $A$  mora biti od premice oddaljena manj kot 2,5 cm.



13 Kot meri  $38^\circ$



14

