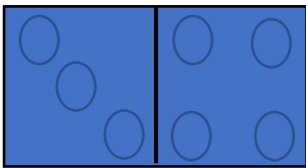
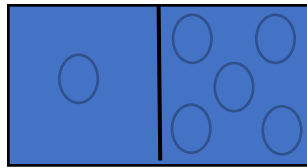


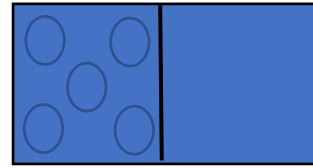
- Napiši račune v zvezek in seštej:



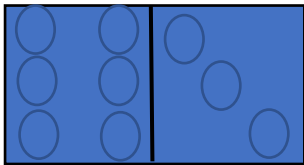
$$3 + 4 = \square$$



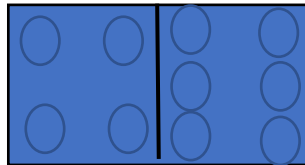
\_\_\_\_\_



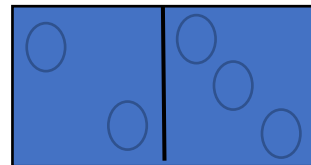
\_\_\_\_\_



\_\_\_\_\_



\_\_\_\_\_



\_\_\_\_\_