

VADIM MATEMATIKO VSAK DAN – PODALJŠANO BIVANJE

UREDİ ŠTEVILA OD NAJMANJŠEGA DO NAJVEČJEGA.

45, 80, 77, 23, 19



55, 50, 87, 30, 5



69, 23, 10, 13, 28 ____/____/____/____/____	42, 69, 90, 29, 7 ____/____/____/____/____
40, 55, 80, 15, 13 ____/____/____/____/____	34, 55, 70, 83, 23 ____/____/____/____/____

UREDİ ŠTEVILA OD NAJVEČJEGA DO NAJMANJŠEGA.

41, 20, 22, 24, 4




16, 39, 28, 40, 51



18, 19, 98, 20, 15 ____/____/____/____/____	99, 74, 11, 64, 54 ____/____/____/____/____
52, 22, 10, 46, 17 ____/____/____/____/____	70, 34, 52, 29, 80 ____/____/____/____/____

REŠI.

(- 10)		(+ 10)
	14	
	26	
	42	
	37	
	60	
	53	



(- 10)		(+ 10)
	12	
	21	
	49	
	33	
	68	
	59	

IZRAČUNAJ.

$12 + 4 = \square$	$13 + 3 = \square$	$10 + 5 = \square$
$16 + 4 = \square$	$11 + 7 = \square$	$19 + 1 = \square$
$17 + 3 = \square$	$12 + 6 = \square$	$13 + 6 = \square$
$10 + 4 = \square$	$13 + 7 = \square$	$14 + 4 = \square$
$16 + 2 = \square$	$8 + 5 = \square$	$9 + 6 = \square$

VSTAVI ZNAK <, >, =.

ZAPIŠI ŠTEVILO.

$55 \bigcirc 38$

$28 \bigcirc 34$



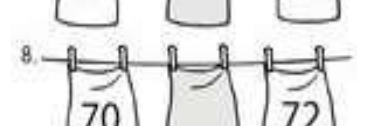
$48 \bigcirc 84$

$58 \bigcirc 49$



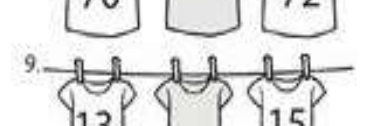
$13 \bigcirc 45$

$29 \bigcirc 31$



$99 \bigcirc 84$

$80 \bigcirc 70$



$43 \bigcirc 29$

$27 \bigcirc 27$



IZRAČUNAJ.

$80 + 14 = \underline{\quad}$

$32 + 50 = \underline{\quad}$

$70 + 21 = \underline{\quad}$

$70 + 21 = \underline{\quad}$

$50 + 16 = \underline{\quad}$

$61 + 10 = \underline{\quad}$

$61 + 10 = \underline{\quad}$

$40 + 23 = \underline{\quad}$

$70 + 25 = \underline{\quad}$

$70 + 25 = \underline{\quad}$

$31 + 30 = \underline{\quad}$

$38 + 60 = \underline{\quad}$