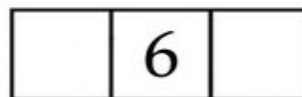






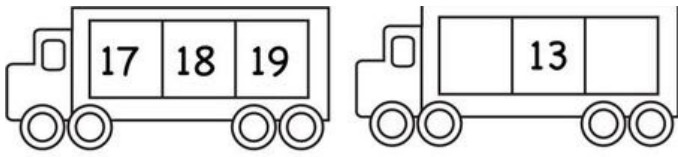



**VADIM MATEMATIKO VSAK DAN – PODALJŠANO BIVANJE**

**VSTAVI ŠTEVILA.**



1	3			7	9	
	12	14				20



	3	5		8	10
11			16	17	

**ŠTEVILA UREDI OD NAJVEČJEGA DO NAJMANJŠEGA.**



**ŠTEJ.**



20 18 17 16 14 13 12

19 18 17 15 13 11

UREDÍ OD NAJMANJŠEGA DO NAJVEČJEGA.

13 19 20 16 14





12 11 15 17 18

14 15 17 12 11

19 20 16 13 18

PREŠTEJ PREDMETE. OBKROŽÍ ŠTEVILO.

VSTAVÍ ZNAK <, >, =.

 10 12 13	 9 10 12	 15 16 17
 12 13 14	 6 7 8	 16 17 19
 16 17 18	 18 19 20	 7 8 9

10 ○ 16

18 ○ 3

11 ○ 14

15 ○ 15

12 ○ 17

19 ○ 14

18 ○ 0

20 ○ 20



2 - 4 -  -  - 10 - 12 -  - 16 -