


# VSAK DAN RAČUNAM DO



## PONEDELJEK

IZRAČUNAJ - SEŠTEJ.

$4 + 4 = \underline{\quad}$

$0 + 6 = \underline{\quad}$

$3 + 5 = \underline{\quad}$

$4 + 6 = \underline{\quad}$

$2 + 7 = \underline{\quad}$

$8 + 0 = \underline{\quad}$



IZRAČUNAJ - ODŠTEJ.

$10 - 7 = \underline{\quad}$

$8 - 6 = \underline{\quad}$

$9 - 8 = \underline{\quad}$

$9 - 4 = \underline{\quad}$

$5 - 0 = \underline{\quad}$

$7 - 7 = \underline{\quad}$

## TOREK

DANA ŠTEVILA ZMANJŠAJ ZA 3. NA ČRTO NAPIŠI REZULTAT.

6

8

9

5

7

10

3

—

—

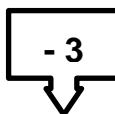
—

—

—

—

—



DANA ŠTEVILA POVEČAJ ZA 3. NA ČRTO NAPIŠI REZULTAT.

5

7

6

3

2

0

4

—

—

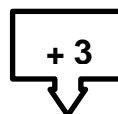
—

—

—

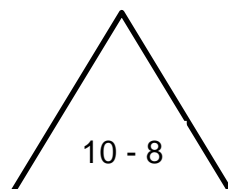
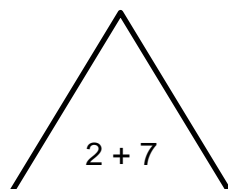
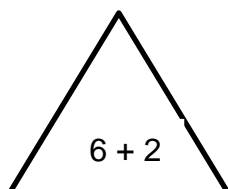
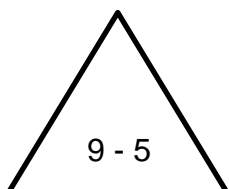
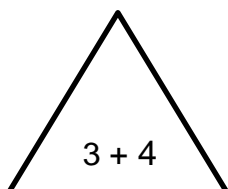

—

—



## SREDA

TRIKOTNIK IN KROG S PRAVILNIM REZULTATOM POBARVAJ Z ISTO BARVO.



## ČETRTEK

DOLOČI PREDHODNIK IN NASLEDNIK ŠTEVIL.

	5	
6		
		9
	3	
1		
4		
		8
		10

OGLEJ SI SLIKO IN NAPIŠI DVA RAČUNA SEŠTEVANJA.



---

---

## PETEK

IZRAČUNAJ SEŠTAVLJENE RAČUNE.

$$4 + 3 + 2 = \square$$

$$8 - 2 - 4 = \square$$

$$7 + 3 - 6 = \square$$

$$9 - 9 + 5 = \square$$