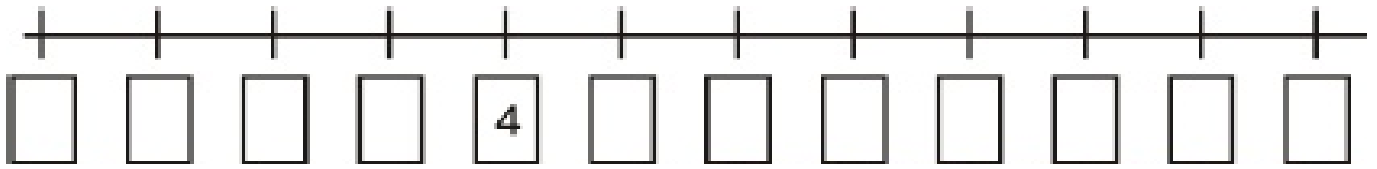
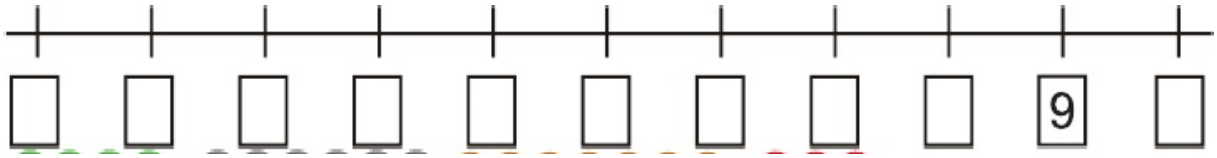
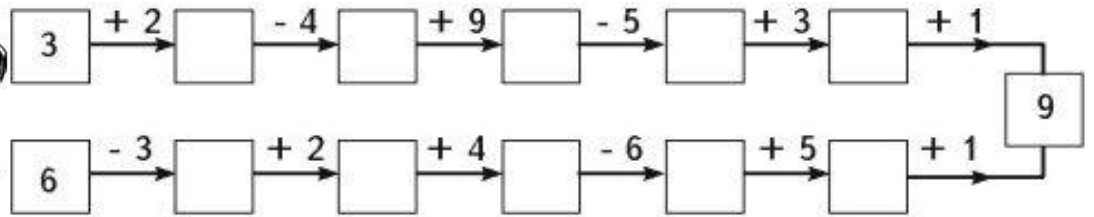


PODALJŠANO BIVANJE: VADIM VSAK DAN, KER IMAM RAD MATEMATIKO. DOPOLNI.



IZRAČUNAJ.



IZRAČUNAJ (težja naloga)

VSTAVI <, >, =

VSTAVI +, - IZRAČUNAJ.

$\square + 2 = 7$

$5 + 4 = \square$

$2 + 4 \square 9 + 1$

$9 \square 1 = 10$

$5 + 4 =$

$\square + 1 = \square$

$\square + \square = 9$

$10 \square 7 + 2$

$9 \square 8 = 1$

$7 + 2 =$

$\square - 8 = \square$

$\square - 6 = \square$

$3 + 5 \square 4 + 5$

$2 \square 5 = 7$

$9 - 7 =$

$\square + 9 = \square$

$\square + 5 = \square$

$3 + 6 \square 10$

$3 \square 2 = 1$

$8 + 1 =$

$\square - 6 = \square$

$\square - 8 = \square$

$10 \square 9 + 1$

$10 \square 0 = 10$

$6 - 5 =$

$\square + \square = 9$

$\square + 9 = \square$

$9 - 5 \square 10$

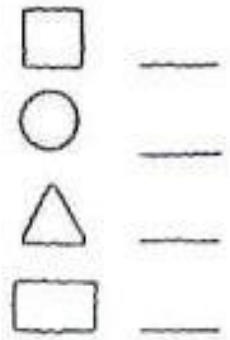
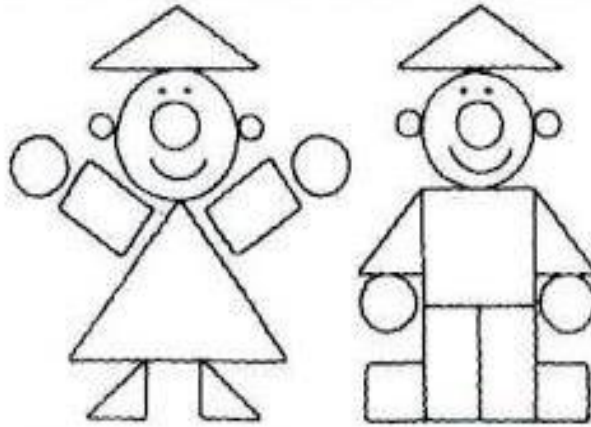
$6 \square 3 = 3$

$4 - 3 =$


POVEJ ZGODBO. ZAPIŠI RAČUN IN POVEJ ODGOVOR.



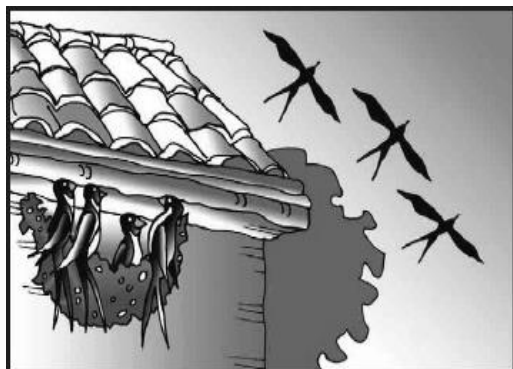
PREŠTEJ LIKE IN VPIŠI ŠTEVILO. KVADRATE POBARVAJ MODRO, TRIKOTNIKE RDEČE, KROGE PA RUMENO. ČESA NISI POBARVAL? _____



IZRAČUNAJ. LAHKO POBARVAŠ.



OPAŽUJ SLIKO.



KOLIKO LASTOVK JE NA SLIKI? _____

KATERO ŠTEVILO JE ZA ENO VEČJE OD 3? _____

ŠTEVILO 9 ZMANJŠAJ ZA ENO? KAJ DOBIŠ? _____

ZAPIŠI ŠTEVILA OD 2 DO 7. _____

POVEJ MATEMATIČNO ZGODBICO.

RAČUN: _____

ODGOVOR: _____

NAPIŠI ŠTIRI RAČUNE.

IZRAČUNAJ.

3 6 9

$10 + 0 = \underline{\hspace{2cm}}$

$10 - 2 = \underline{\hspace{2cm}}$

$7 + 3 = \underline{\hspace{2cm}}$

$10 - 4 = \underline{\hspace{2cm}}$

$10 - 4 = \underline{\hspace{2cm}}$

$3 - 3 = \underline{\hspace{2cm}}$

$9 - 2 = \underline{\hspace{2cm}}$

$0 + 9 = \underline{\hspace{2cm}}$

$10 - 10 = \underline{\hspace{2cm}}$

6 2 4