

4. URA

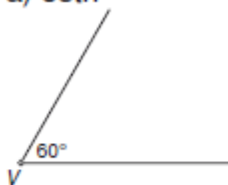
PREMISLI:

Ali veš kako poimenujemo kote glede na njihovo velikost?


Spodaj so rešitve nalog 2. in 3. iz strani 185.

- 2 a) $\alpha = 45^\circ$; ostri
č) $\delta = 120^\circ$; topi

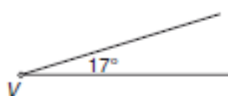
- 3 a) ostri



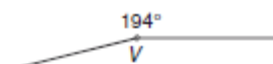
- c) pravi



- d) ostri

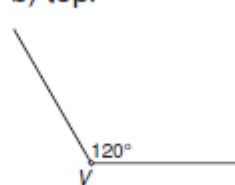


- f) vdrti

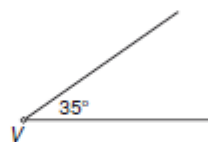


- b) $\beta = 74^\circ$; ostri
d) $\delta = 160^\circ$; topi

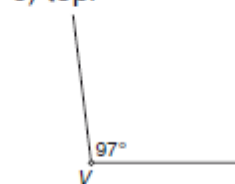
- b) topi



- č) ostri



- e) topi



- g) vdrti

